

## Determining an Individual Force Value Lesson Notes

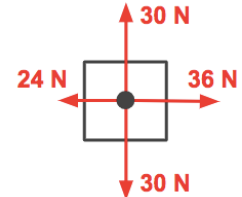
### Newton's Second Law:

When the individual forces acting on an object are NOT balanced, the object accelerates. The acceleration value is ...

$$a = F_{\text{net}} / m$$

### What is Net Force?

$F_{\text{net}}$  is the net force (in Newtons). It refers to the result of adding all the forces as vectors. As shown at the right, the four forces add up to 15 N, right.

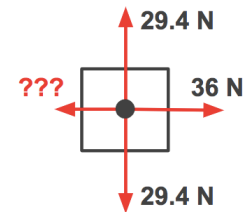


### Determining an Individual Force

In this Lesson, Newton's second law is rearranged to form

$$F_{\text{net}} = m \cdot a$$

If values of  $m$  and  $a$  are known, the  $F_{\text{net}}$  can be calculated ... and then used to determine the *missing force value* in a free-body diagram.



$m$  is often found from  $F_{\text{grav}} = m \cdot (9.8\text{N/kg})$ .

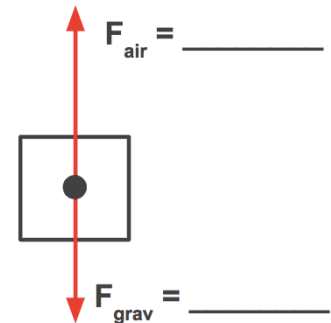
In the problem depicted at the right, three forces and the value of acceleration are known. The fourth force must be calculated.

$a = 4.0 \text{ m/s/s, right}$   
 $m =$  \_\_\_\_\_  
 $F_{\text{net}} =$  \_\_\_\_\_  
 $??? =$  \_\_\_\_\_

### Example 1:

A 62-kg skydiver is accelerating downward at  $4.6 \text{ m/s}^2$ . Determine the air resistance force.

### Solution:

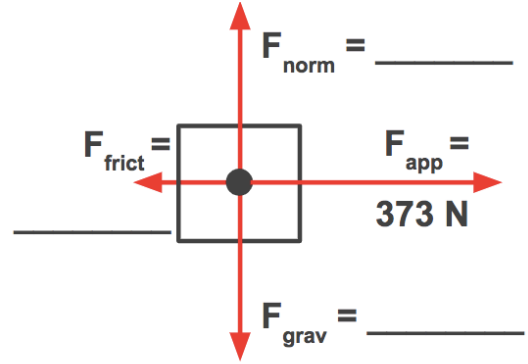


$m = 62 \text{ kg}$   
 $a =$  4.6 m/s<sup>2</sup>, up  
 $F_{\text{net}} =$  \_\_\_\_\_  
 $F_{\text{air}} =$  \_\_\_\_\_

**Example 2:**

A rightward force of 373 N is applied to a 118-kg object to accelerate it rightward at  $1.24 \text{ m/s}^2$ . Determine the friction force.

**Solution:**



$m = 118 \text{ kg}$

$a = 1.24 \text{ m/s}^2, \text{ Rt}$

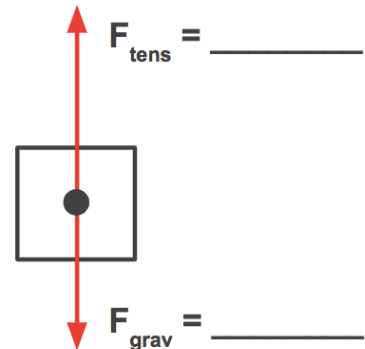
$F_{\text{net}} = \underline{\hspace{2cm}}$

$F_{\text{frict}} = \underline{\hspace{2cm}}$

**Example 3:**

Determine the tension force required to accelerate a 4.80-kg bucket upward out of a well at  $0.825 \text{ m/s}^2$ .

**Solution:**



$m = \underline{4.80 \text{ kg}}$

$a = \underline{0.825 \text{ m/s}^2, \text{ up}}$

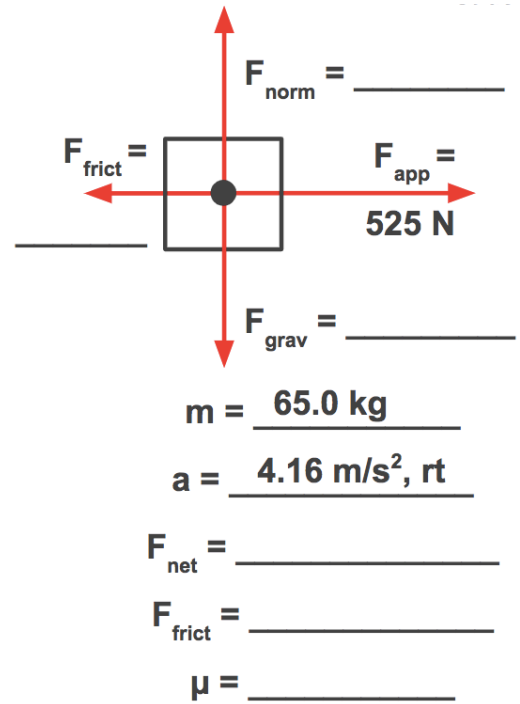
$F_{\text{net}} = \underline{\hspace{2cm}}$

$F_{\text{tens}} = \underline{\hspace{2cm}}$

**Example 4:**

A 525-N rightward force is applied to accelerate a 65.0-kg object at  $4.16 \text{ m/s}^2$ . Determine the coefficient of friction.

**Solution:**



**Solving for an individual force value:**

- Draw a free-body diagram.
- Identify values of all known forces ... and of the mass and the acceleration.
- Calculate the net force ( $F_{\text{net}} = m \cdot a$ )
- Use the value of  $F_{\text{net}}$  to determine all missing force values.