

Modified Atwood's Machines

Lesson Notes

Learning Outcomes

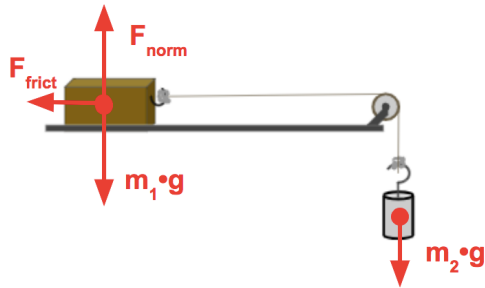
- How do you use a free-body diagram and Newton's second law to analyze and solve a modified Atwood's Machine problem?

The Basic Approach

A modified Atwood's Machine problem can be analyzed in two steps.

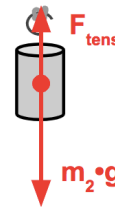
- A System Analysis**

Relate the acceleration to the mass values.



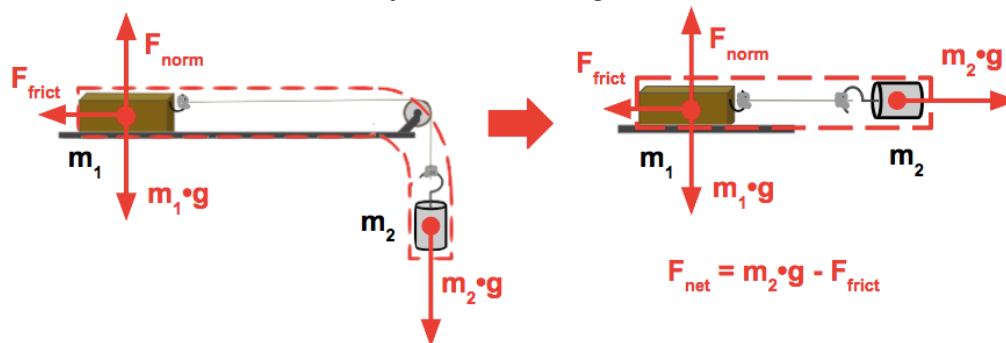
- An Individual Object Analysis**

Relate the tension in the string to the acceleration and the mass values.



Straightening Out the System

A convenient strategy involves picturing the gravity force on the hanging mass to be a horizontal force that accelerates the system to the right.



Example 1:

A 0.150-kg hanging mass (m_2) is attached by a string to a 0.500-kg cart (m_1) at rest on a friction-free table. Calculate the acceleration of the cart and the tension in the string.

Step 1: System Analysis

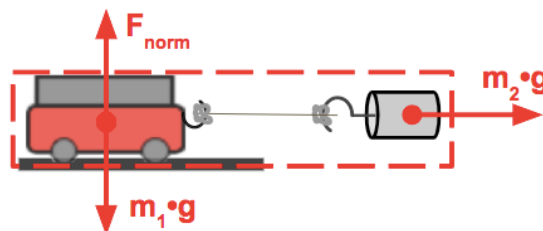
$$m_{\text{total}} = 0.650 \text{ kg}$$

$$F_{\text{net}} = m_2 \cdot g$$

$$F_{\text{net}} = (0.150 \text{ kg}) \cdot (9.8 \text{ N/kg})$$

$$F_{\text{net}} = 1.47 \text{ N}$$

$$a = F_{\text{net}} / m_{\text{total}} = (1.47 \text{ N}) / (0.650 \text{ kg}) = \mathbf{2.26 \text{ m/s}^2}$$



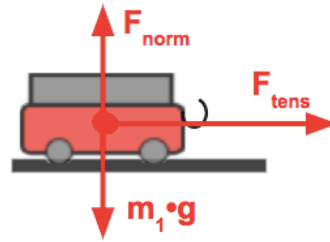
Step 2: Individual Object Analysis

Consider m_1 : $m_1 = 0.500 \text{ kg}$

$$F_{\text{net}} = m_1 \cdot a$$

$$F_{\text{net}} = (0.500 \text{ kg}) \cdot (2.26 \text{ m/s}^2)$$

$$F_{\text{net}} = 1.13 \text{ N}$$



The vertical forces balance. The tension force is the one unbalanced force that causes the acceleration. It equals F_{net} .

$$F_{\text{tens}} = 1.13 \text{ N}$$

Example 2:

A 0.250-kg hanging mass (m_2) is attached by a string to a 0.500-kg block (m_1) at rest on a table. The coefficient of friction (μ) is 0.215. Calculate the acceleration of the cart and the tension in the string.

Step 1: System Analysis

$$m_{\text{total}} = 0.750 \text{ kg}$$

$$m_2 \cdot g = (0.250 \text{ kg}) \cdot (9.8 \text{ N/kg}) = 2.45 \text{ N}$$

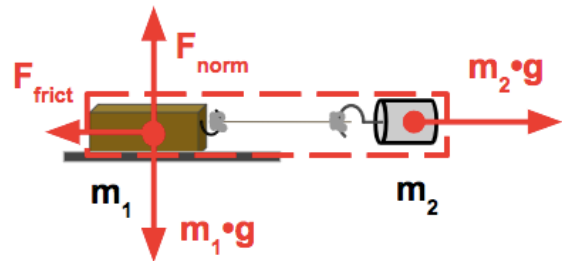
$$F_{\text{frict}} = \mu \cdot F_{\text{norm}} = \mu \cdot m_1 \cdot g$$

$$F_{\text{frict}} = (0.215) \cdot (0.500 \text{ kg}) \cdot (9.8 \text{ N/kg})$$

$$F_{\text{frict}} = 1.05 \text{ N} \quad (1.0535 \text{ N})$$

$$F_{\text{net}} = m_2 \cdot g - F_{\text{frict}} = 2.45 \text{ N} - 1.05 \text{ N} = 1.40 \text{ N}$$

$$a = F_{\text{net}} / m = (1.40 \text{ N}) / (0.750 \text{ kg}) = 1.86 \text{ m/s}^2$$



Step 2: Individual Object Analysis

Consider m_2 : $m_2 = 0.250 \text{ kg}$

$$m_2 \cdot g = (0.250 \text{ kg}) \cdot (9.8 \text{ N/kg}) = 2.45 \text{ N}$$

$$F_{\text{net}} = m_2 \cdot a = (0.250 \text{ kg}) \cdot (1.86 \text{ m/s}^2)$$

$$F_{\text{net}} = 0.466 \text{ N} \quad (0.4655 \text{ N})$$



$$F_{\text{net}} = m_2 \cdot g - F_{\text{tens}}$$

$$0.466 \text{ N} = 2.45 \text{ N} - F_{\text{tens}}$$

$$F_{\text{tens}} = 2.45 \text{ N} - 0.466 \text{ N}$$

$$F_{\text{tens}} = 1.98 \text{ N}$$