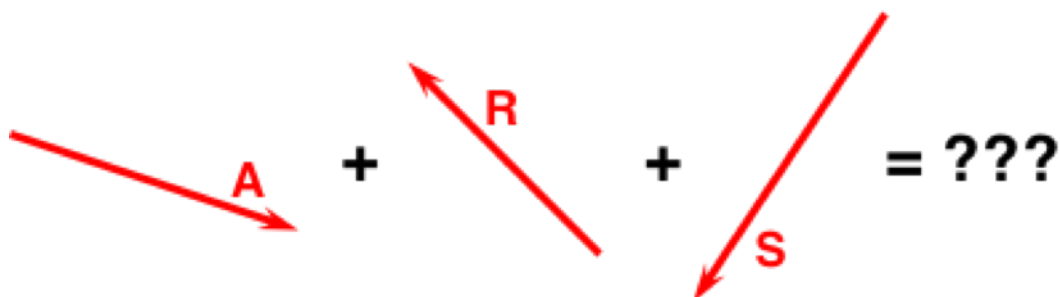


Head to Tail Addition

Question Group 1

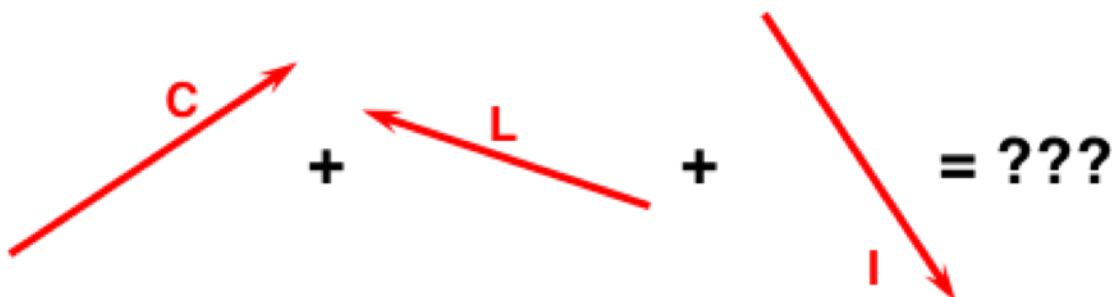
Question 1

Identify the correct head-to-tail vector addition diagram for this vector addition equation:



Question 2

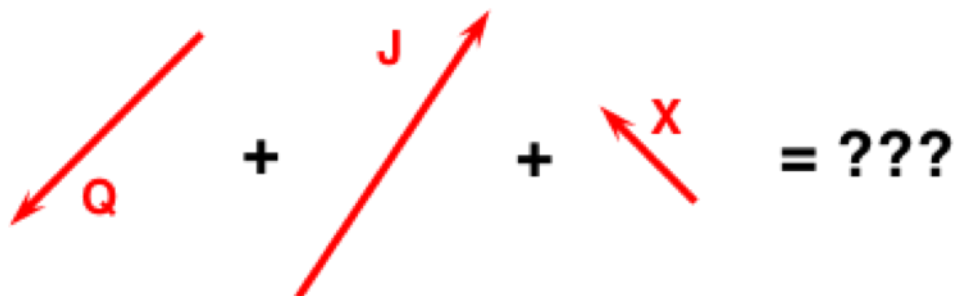
Identify the correct head-to-tail vector addition diagram for this vector addition equation:



Question Group 2

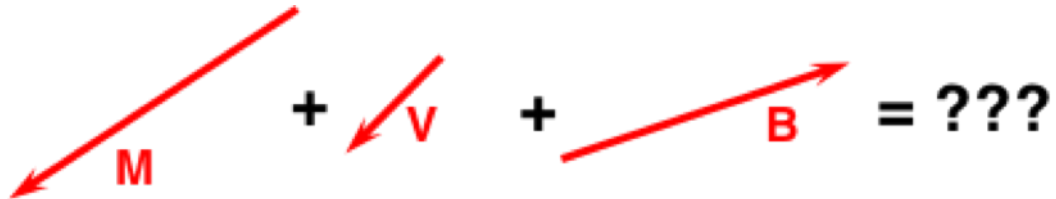
Question 3

Identify the correct head-to-tail vector addition diagram for this vector addition equation:



Question 4


Identify the correct head-to-tail vector addition diagram for this vector addition equation:



Question Group 3

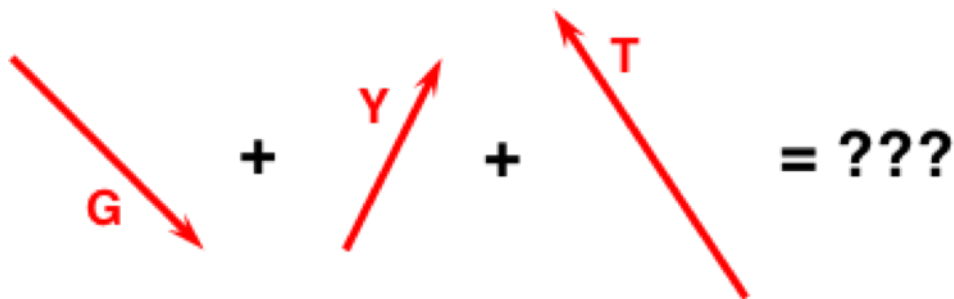
Question 5

Identify the correct head-to-tail vector addition diagram for this vector addition equation:



Question 6

Identify the correct head-to-tail vector addition diagram for this vector addition equation:



Question Group 4

Question 7

Identify the correct head-to-tail vector addition diagram for this vector addition equation:



Question 8

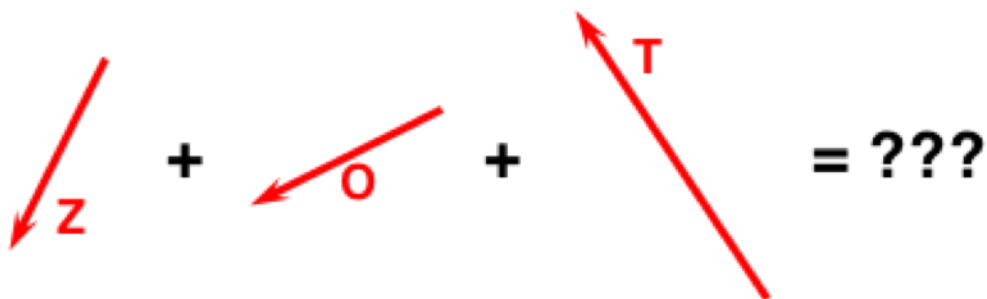
Identify the correct head-to-tail vector addition diagram for this vector addition equation:



Question Group 5

Question 9

Identify the correct head-to-tail vector addition diagram for this vector addition equation:



Question 10

Identify the correct head-to-tail vector addition diagram for this vector addition equation:



Question Group 6

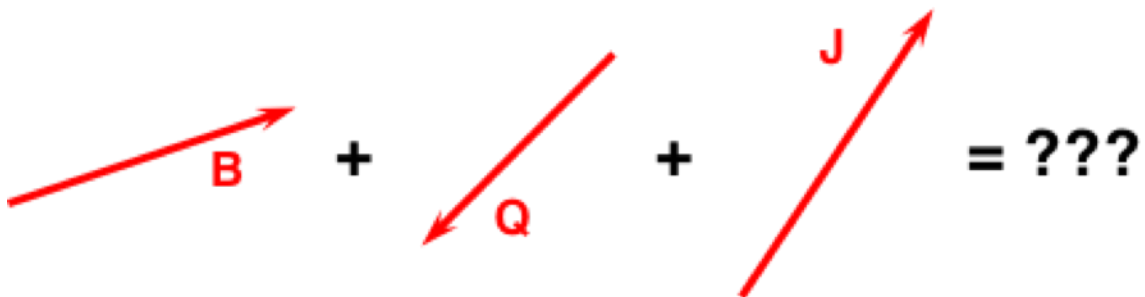
Question 11

Identify the correct head-to-tail vector addition diagram for this vector addition equation:



Question 12

Identify the correct head-to-tail vector addition diagram for this vector addition equation:



Question Group 7

Question 13

Identify the correct head-to-tail vector addition diagram for this vector addition equation:



Question 14

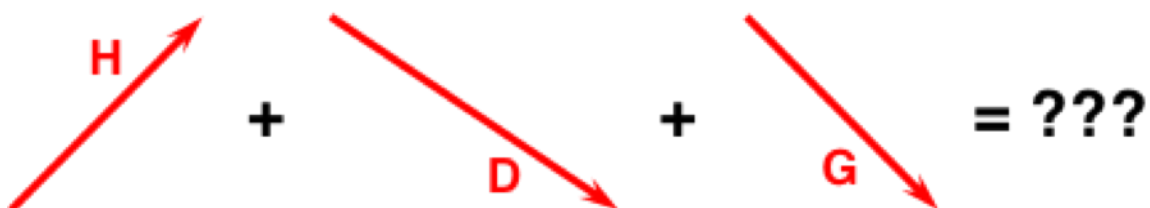
Identify the correct head-to-tail vector addition diagram for this vector addition equation:



Question Group 8

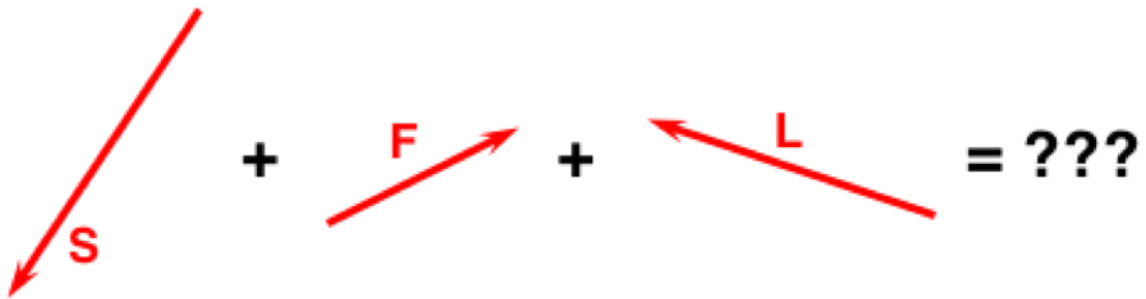
Question 15

Identify the correct head-to-tail vector addition diagram for this vector addition equation:



Question 16

Identify the correct head-to-tail vector addition diagram for this vector addition equation:



Question Group 9

Question 17

Identify the correct head-to-tail vector addition diagram for this vector addition equation:



Question 18

Identify the correct head-to-tail vector addition diagram for this vector addition equation:

